













 = 1
 = 10

Dibuja los bolos que representan estos números.

5

9

4

2

10

6

7

3

8

Ordena los siguientes números de menor a mayor:

5, 8, 3, 7

2, 6, 9, 4

3, 7, 5, 9

Completa las series:


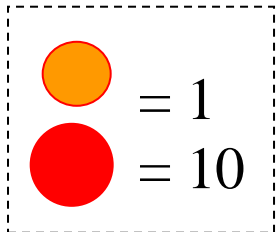
1, 3, 5, 7, 9,

0, 2, 4, 6, 8,

¿Cuántos euros hay?



1, 2, 3, 4, 5, 6, 7, 8, 9, 10,
11, 12, 13, 14, 15, 16, 17, 18, 19, 20



Dibuja los bolos que representan estos números.

15

19

14

12

20

16

17

13

18

Ordena los siguientes números de menor a mayor:

5, 18, 13, 7

12, 6, 19, 4

13, 7, 15, 9

Completa las series:

1, 3, 5, 7, 9, 11, 13, 15, 17, 19


0, 2, 4, 6, 8, 10, 12, 11, 13, 17

¿Cuántos euros hay?



10 ●
 20 ● ●
 30 ● ● ●

1 2, 3, 4, 5, 6, 7, 8, 9, 10,
 11, 12, 13, 14, 15, 16, 17, 18, 19, 20,
 21, 22 23, 24, 25, 26, 27, 28, 29, 30



Dibuja los bolos que representan estos números.

15

29

14

22

30

16

27

23

18

Ordena los siguientes números de menor a mayor:

15, 8, 23, 27

22, 16, 9, 14

13, 27, 15, 19

Completa las series:

11, 13, 15, 17, 19, 21, 23, 25, 27,

12, 14, 16, 18, 20, 22, 24, 26, 28

¿Cuántos euros hay?







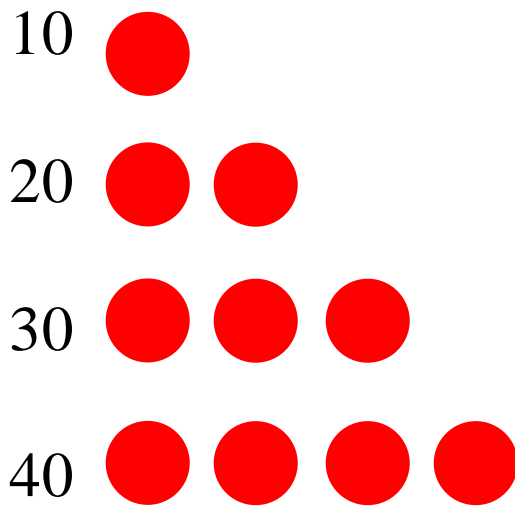












1, 2, 3, 4, 5, 6, 7, 8, 9, 10
11, 12, 13, 14, 15, 16, 17, 18, 19, 20
21, 22, 23, 24, 25, 26, 27, 28, 29, 30
31, 32, 33, 34, 35, 36, 37, 38, 39, 40

Ordena los siguientes números de menor a mayor:

38, 12, 9, 26

22, 14, 37, 7

19, 34, 21, 4

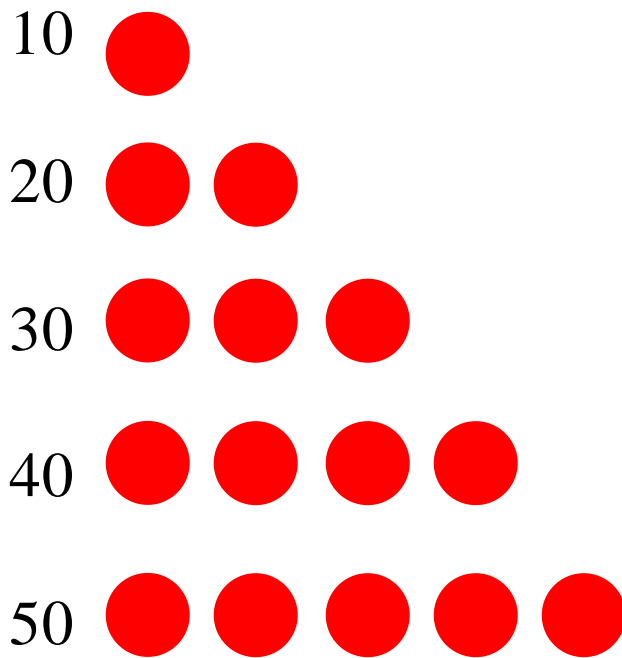
31, 10, 3, 9

40, 20, 10, 30

15, 35, 25, 5

¿Cuántos euros hay?





Escribe los números que faltan:

1, , 3, 4, 5, 6, 7, 8, 9, 10
 11, , 13, 14, 15, , 17, 18, 19, 20
 21, 22, 23, , 25, 26, 27, 28, 29,
 31, 32, , 34, 35, 36, , 38, 39, 40
 41, 42, 43, 44, , 46, , 48, , 50

Ordena los siguientes números de menor a mayor

24, 42, 12, 21

33, 22, 11, 44

23, 32, 14, 41

17, 27, 47, 37

¿Cuántos euros hay en cada montón?



